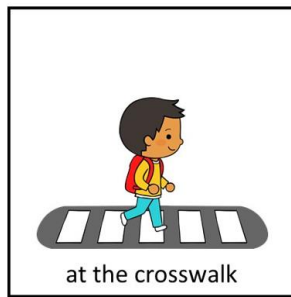
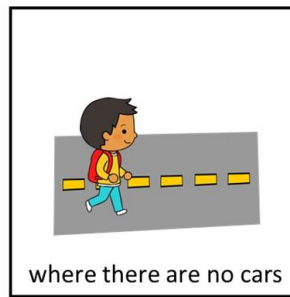


Name _____


1. Where should you cross the street?



(A)



(B)



(C)

2. Where should you look before crossing the street?

- A. Right – Left – Right
- B. Up – Down – Up
- C. Left – Right – Left

3. Which one is crossing the street safely?



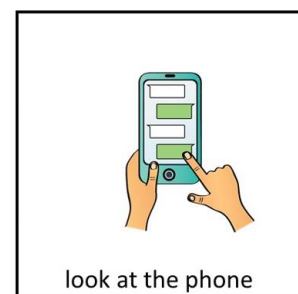
4. When we are crossing the street, it is never safe to:



(A)



(B)




(C)

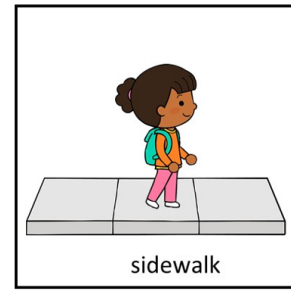
5. To be safe on the street, make sure you use:



(A)




(B)




(C)

6. Circle the pictures showing safe choices. HINT: There are 7 safe choices.



7. This boy is making a dangerous choice. What would be a safer way to get his ball?



- A. Ask a grown up to get the ball for you.
- B. Stop and look both ways, instead of running into the street after the ball.
- C. Go to a corner to cross to get the ball, instead of going between cars where oncoming traffic might not see you.
- D. All of the above.